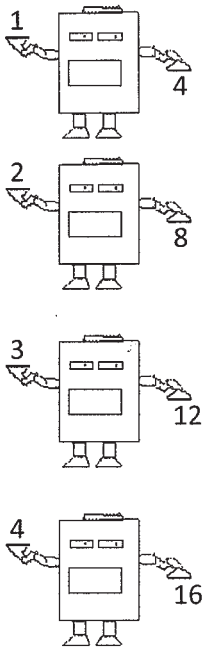
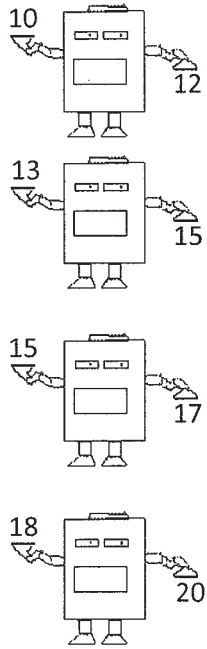


Equation: _____



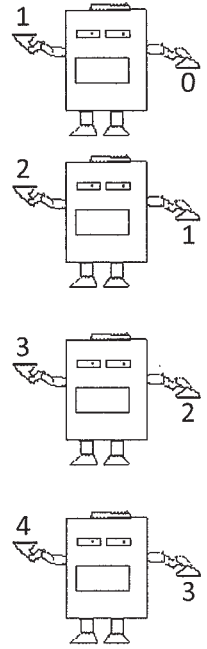
x	f(x)
1	4
2	8
3	12
4	16

Equation: _____



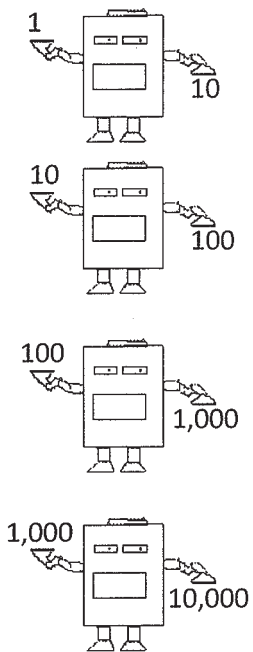
x	f(x)
10	12
13	15
15	17
18	20

Equation: _____



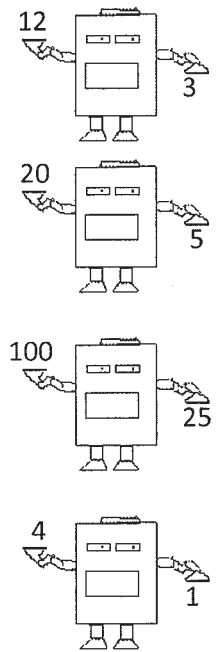
x	f(x)
1	0
2	1
3	2
4	3

Equation: _____



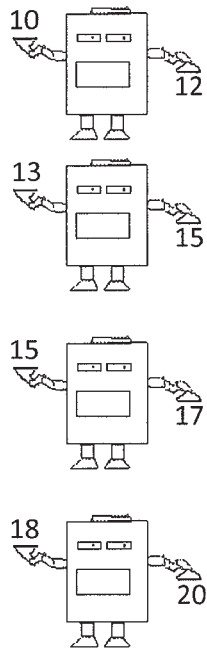
x	f(x)
1	10
10	100
100	1,000
1,000	10,000

Equation: _____



x	f(x)
12	3
20	5
100	25
4	1

Equation: _____



x	f(x)
10	1
13	4
15	9
18	16

Make up your own function! _____

Fill in the table for your function!



x	f(x)